

(3 Hours)

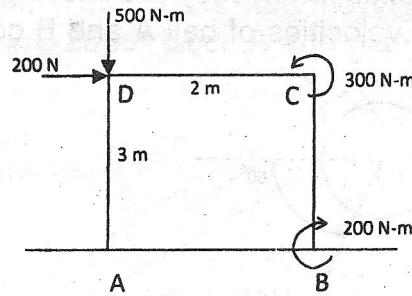
[Total Marks : 100

- N.B.** (1) Question No. 1 is compulsory.
 (2) Attempt any four questions from the remaining six questions.
 (3) **Figures to the right indicate full marks.**
 (4) **Assume** suitable additional data if necessary and state the same clearly in your answer.
 (5) Take $g = 9.81 \text{ m/s}^2$.

1. Solve any four of the following :—

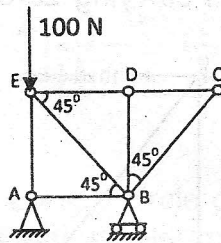
5

(a) For the Figure shown, find resultant force and moment at point A.



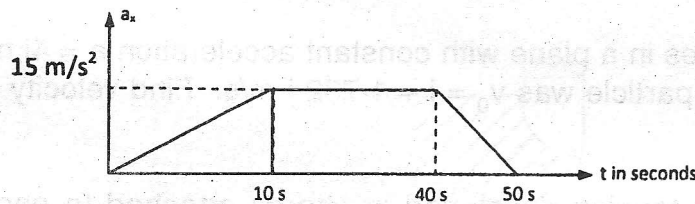
(b) Find forces in members AB, AE, ED, BC, CD.

5



(c) Figure shows an plot of a_x versus time for a particle moving along x-axis. What is the speed and distance covered by the particle after 50 seconds ?

5



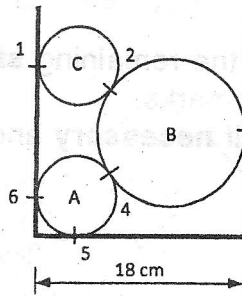
- (d) By what percentage the range of projectile is increased if initial velocity is increased by 5% ?
- (e) A ball is dropped from a height of 12 m upon a horizontal slab. If it rebounds to height of 4 m. Find coefficient of restitution.

5

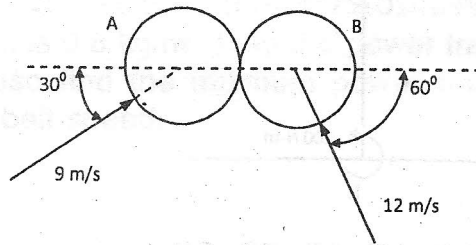
5

[TURN OVER

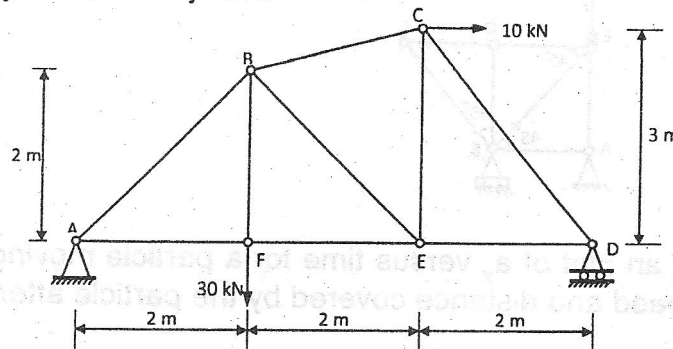
2. (a) Three cylinders are piled up in a rectangular channel as shown in figure. 12 Determine the reactions at point 6 between the cylinder A and the vertical wall of the channel. (Cylinder A : radius = 4 cm, $m = 15$ kg, Cylinder B : radius = 6 cm, $m = 40$ kg, Cylinder C : radius = 5 cm, $m = 20$ kg).



- (b) Two identical balls of 120 gm collide when they are moving with velocities as shown in figure. 8 Determine the velocities of ball A and B completely after the impact. Take $e = 0.8$.

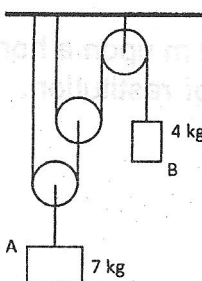


3. (a) A simply supported pin jointed truss is loaded and supported as shown in the 12 following figure. Identify the members carrying zero force and find forces in members by method of joints.

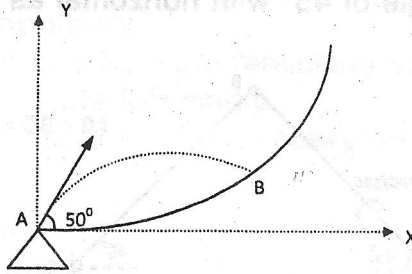


- (b) A particle moves in a plane with constant acceleration $a = 4i$ m/s². At $t = 0$ the 8 velocity of the particle was $v_0 = i + 1.732j$ m/s. Find velocity of the particle at $t = 1$ sec.

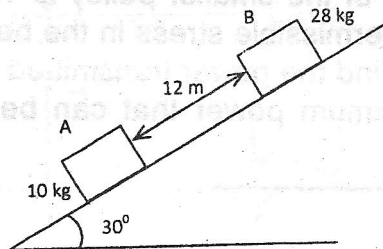
4. (a) Determine the tension developed in chords attached to each block and the 12 accelerations of the blocks when the system shown is released from rest. Neglect the mass of the pulleys and chords.



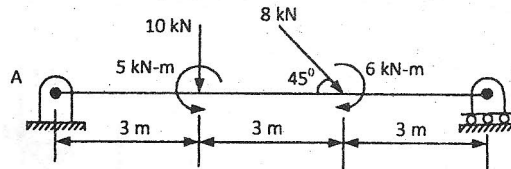
- (b) The water sprinkler positioned at the base of a hill releases a stream of water with a velocity of 6 m/s as shown. Determine the point B (x,y) where the water particles strike the ground on the hill. Assume that the hill is defined by the equation $y = 0.2 x^2$ m, and neglect the size of the sprinkler. 8



5. (a) Two blocks A (mass 10 kg), B (mass 28 kg) are separated by 12 m as shown in the figure. If the blocks start moving, find the time 't' when the blocks collide. Assume $\mu = 0.25$ for block A and plane and $\mu = 0.10$ for block B and plane. 12



- (b) Find the reactions at the supports of the beam applying conditions of equilibrium. 8



6. (a) A particle moves along a circle of radius 20 cm so that $s = 20 \pi t^2$ cm. Find its tangential and normal acceleration after it has completed a revolution. 8
- (b) Find the centroid of the area shown in figure. Also find the moment of inertia of the same area about x axis. 12

